








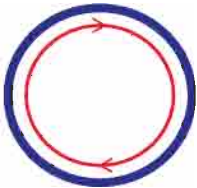

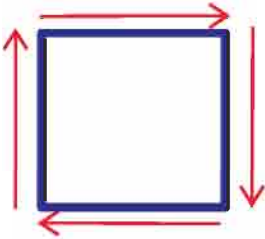
पाठ 2

1 से 9 तक अंक लिखना

अंक लेखन पूर्व अभ्यास

 A horizontal line with a blue top stroke and a red bottom stroke, ending in a red arrow pointing right.		
 A vertical line with a blue left stroke and a red right stroke, ending in a red arrow pointing down.		
 A diagonal line sloping downwards from left to right, with a blue top stroke and a red bottom stroke, ending in a red arrow pointing down and left.		
 A curved line arching upwards, with a blue top stroke and a red bottom stroke, ending in a red arrow pointing down and right.		
 A curved line arching downwards, with a blue top stroke and a red bottom stroke, ending in a red arrow pointing up and right.		



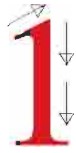




○	○	○	○	○	○
○	○	○	○	○	○

○	○	○	○	○	○	○	○	○





1	1	1	1	1	1
1	1	1	1	1	1

1	1	1	1	1	1	1	1	1





2	2	2	2	2	2
2	2	2	2	2	2

2	2	2	2	2	2	2	2	2



3

3	3	3	3	3	3
3	3	3	3	3	3

3	3	3	3	3	3	3	3	3





4	4	4	4	4	4
4	4	4	4	4	4

4	4	4	4	4	4	4	4	4





5	5	5	5	5	5
5	5	5	5	5	5

5	5	5	5	5	5	5	5	5





6	6	6	6	6	6
---	---	---	---	---	---

6	6	6	6	6	6
---	---	---	---	---	---

6	6	6	6	6	6	6	6	6
---	---	---	---	---	---	---	---	---



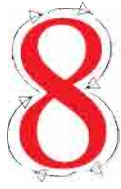


7	7	7	7	7	7
---	---	---	---	---	---

7	7	7	7	7	7
---	---	---	---	---	---

7	7	7	7	7	7	7	7	7
---	---	---	---	---	---	---	---	---





8	8	8	8	8	8	8	8
8	8	8	8	8	8	8	8

8	8	8	8	8	8	8	8	8














9	9	9	9	9	9
9	9	9	9	9	9

9	9	9	9	9	9	9	9	9




लिखिए

								
1	2	3	4	5	6	7	8	9



देवनागिरी अंक लिखिए

१					
२					
३					
४					
५					
६					
७					
८					
९					






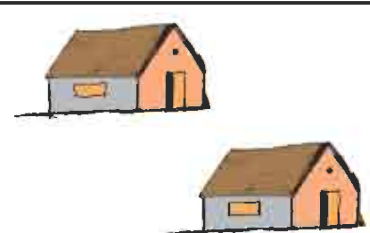

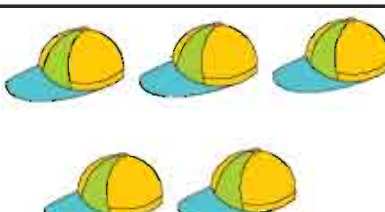


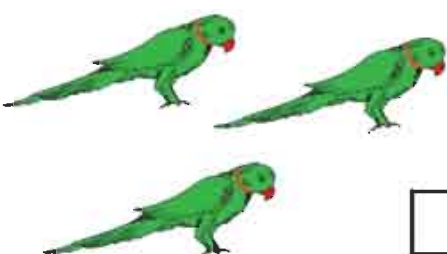

जोड़ी मिलाएँ

१	7
३	2
५	1
२	3
७	5

9	४
8	६
2	९
6	२
4	८



चित्रों को गिनकर संख्या लिखिए

 <input type="text" value="3"/>	 <input type="text"/>
 <input type="text"/>	 <input type="text"/>
 <input type="text"/>	 <input type="text"/>
 <input type="text"/>	 <input type="text"/>
 <input type="text"/>	 <input type="text"/>

